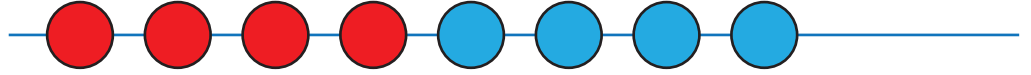
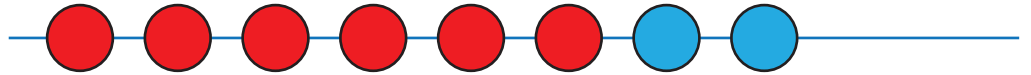


Uzupełnij działania zgodnie z rysunkami według podanego wzoru.

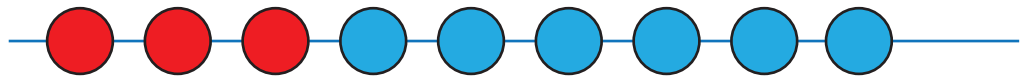
$$4 + 4 = 8$$



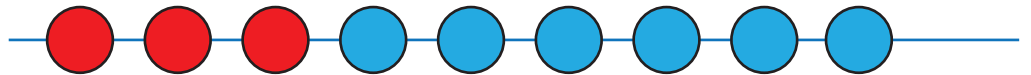
$$6 + 2 =$$



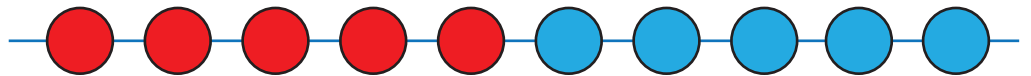
$$3 + 6 =$$



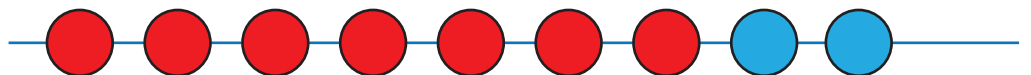
$$3 + 6 =$$



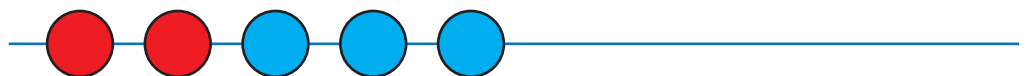
$$5 + =$$



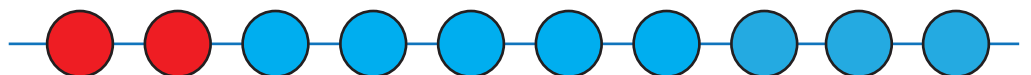
$$+ 2 =$$



$$+ =$$



$$+ =$$



$$+ =$$

