



Uzupełnij rysunki tak, aby ilustrowały wskazane działania.


$$3 \cdot 9 = 27$$



$$5 \cdot 3 = 15$$



$$6 \cdot 4 = \square$$




$$\square \cdot 5 = \square$$



$$\square \cdot \square = \square$$



$$\square \cdot \square = \square$$



$$\square \cdot \square = 20$$

