


Odczytaj daty imienin poszczególnych osób. Uporządkuj chronologicznie imieniny, przypisując im kolejne liczby.




1 XII



4 IV




20 VI



28 X




1 IX




22 II




11 VII




30 XI



21 III



14 V



12 I



13 VIII

